

Name: _____



Finished?

Spend 10+ minutes on TTRockstars.

Part 1

Section A
Fill in this jumbled grid

<i>x</i>	8	11	2	12	7	3	6	4	0	9	5	1	10
12													
9													
8													

Part 2

Fill in the gaps.

1. $\frac{1}{2} = 0.5 = \boxed{} \%$

2. $\frac{}{} = 0.25 = \boxed{25} \%$

3. $\frac{1}{10} = 0. = \boxed{} \%$

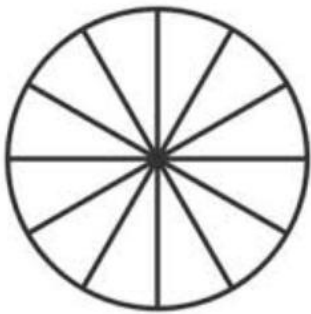
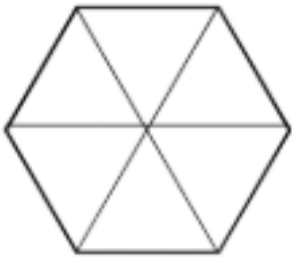
4. $\frac{1}{100} = 0. = \boxed{} \%$

5. $\frac{}{} = 0. = \boxed{75} \%$

6. $\frac{1}{1} = = \boxed{} \%$


Part 3

Shade in $\frac{1}{3}$ of the shapes.



Part 4

1. $6.1 - 0.5 = \boxed{}$



2. $16.41 - 12.52 = \boxed{}$

