

Name

Class

Year 6 Maths Homework

1) Complete this jumbled grid

x	8	3	1	4	6	5	2	7	9	11	12	0	10
3													
8													
6													

Answer these questions

2) $\times 6 = 42$ (3) What is 3,682 to the nearest (a) 10 = _____ (b) 100 = _____ (c) 1,000 = _____

(4) Continue the sequence of **square numbers**: 1, 4, 9, 16, _____, 36, _____, _____, 81, _____, 121, _____

5) $\div 9 = 11$ (6) $36 \div$ $= 12$ (7) $30 \times 70 =$ _____ (8) $0.6 \times 100 =$ _____

9) $0.3 \times 7 =$ _____ (10) $10^2 =$ _____ (11) $950 \div 10 =$ _____

12) $100 -$ $= 37$ (13) $- 34 = 15$

14) (a) How many tens does the number 245 have altogether? _____ (b) Take 1 ten away from 245 = _____

15) 65,983 Write the value of the underlined digit = _____

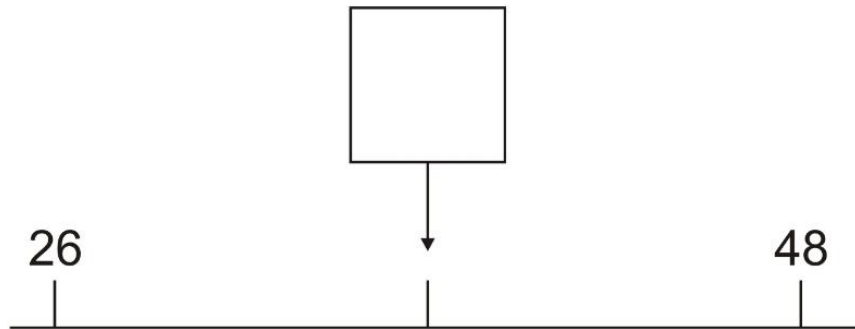
16) a) $987 = 900 + \square + 7$

(b) $9,342 = \square + 300 + \square + 2$

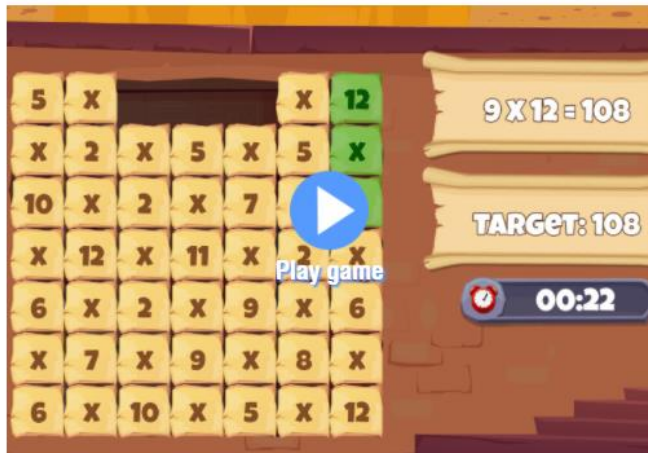
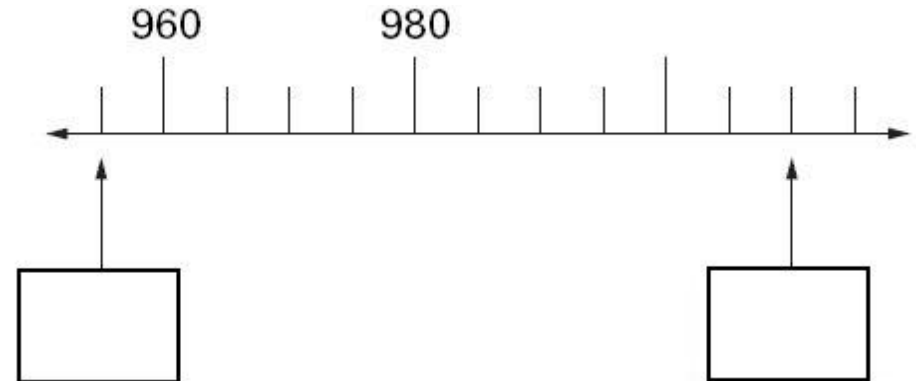
(17) Work out the number halfway between 26 and 48

(18) Here is part of a number line.

Write it in the box



Write the two missing numbers in the boxes.



19) Now, play this game to have a practice at multiplication tables. Play for at least 10 minutes.

Google search 'maths frame tile crash'.

<https://mathsframe.co.uk/en/resources/resource/572/Multiplication-Tile-Crash>

